

Part-I : General Intelligence and Reasoning**भाग-I : सामान्य बुद्धिमता एवं तर्कशक्ति**

Directions (1 - 3) : In each of the following questions, select the related letter/word/number from the given alternatives.

निर्देश (1 - 3) : निम्न प्रत्येक प्रश्न में दिए गए विकल्पों में से सम्बन्धित अक्षर/शब्द/संख्या को चुनिए।

- Distance : Odometer :: ? : Barometer
दूरी : मीलमापी :: ? : वायुदाबमापी
(A) Humidity/आर्द्रता
(B) Pressure/दाब
(C) Thickness/मोटाई
(D) Wind/हवा
- FLMO : ? :: BFEN : ARSO
(A) BZYS (B) CZYS
(C) SZYB (D) YZBC
- 561 : 912 :: 141 : ?
(A) 29 (B) 22
(C) 16 (D) 443

Directions (4 - 6) : Find the odd word/letters/number pair/number from the given alternatives.

निर्देश (4 - 6) : दिये गए विकल्पों में से विषम शब्द/अक्षर/संख्या युग्म/संख्या को चुनिए।

- (A) 24 - 1614 (B) 270 - 569
(C) 120 - 4325 (D) 162 - 6930
- (A) Root/जड़ (B) Flower/फूल
(C) Fruit/फल (D) Leaves/पत्ते
- (A) BDZB (B) MOKM
(C) PRMP (D) TVRT
- Arrange the following words as per order in the dictionary.
निम्नलिखित शब्दों को शब्दकोश में दिए गए क्रम के अनुसार व्यवस्थित करें।
1. Dillydallying 2. Dillydallied
3. Dillydally 4. Dilled
5. Dillydallies
(A) 4, 2, 3, 5, 1 (B) 4, 2, 5, 3, 1
(C) 4, 5, 3, 1, 2 (D) 4, 5, 3, 2, 1
- Choose the correct alternatives from the given ones that will complete the series.
निम्न विकल्पों में से सही विकल्प का चयन करें जो दी गई श्रृंखला को पूरा करेगा।
L _ N O _ MLLM _ OO _ ML
(A) MNNNO (B) MONNO
(C) MONON (D) MONNN
- Sumit starts walking from his home facing west direction. After walking 15 km, he takes a right turn and walks another 10 km. He takes another right turn walks 20 km to reach his school. How far is he from his home?

सुमित अपने घर से पश्चिम की ओर मुख करके चलना आरंभ करता है। 15 किमी. चलने के बाद वह दाएं मुड़ता है और 10 किमी. चलता है। वह दाएं मुड़ता है और 20 किमी. चलने के बाद अपने विद्यालय पहुँचता है। वह अपने घर से कितनी दूरी पर है?

- (A) $10\sqrt{2}$ km/किमी. (B) $5\sqrt{5}$ km/किमी.
(C) $5\sqrt{2}$ km/किमी. (D) $10\sqrt{5}$ km/किमी.
- In a class, Amit has more marks than Anu and Reena does not have the least marks. Sagar has more marks than Tarun and Tarun has more marks than Amit, who among them will have the least marks?
एक कक्षा में, अमित के अंक अनु से अधिक हैं और रीना के सबसे कम नहीं हैं। सागर के अंक तरुण से अधिक तथा तरुण के अंक अमित से अधिक हैं, इनमें से किसके अंक सबसे कम हैं।
(A) Amit/अमित (B) Anu/अनु
(C) Sagar/सागर (D) Tarun/तरुण

Directions (11-13) : In the following questions, a series is given with one terms missing. Choose the correct alternative from the given ones that will complete the series:

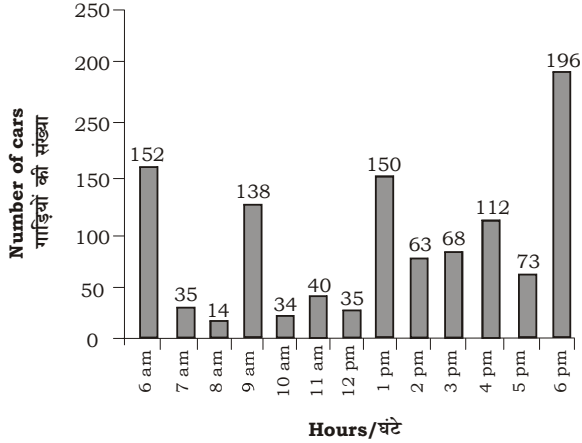
निर्देश (11-13) : निम्नलिखित प्रश्नों में, एक अनुक्रम दिया गया है जिसमें एक पद लुप्त है। दिए गए विकल्पों में से वह सही विकल्प चुनिए जो अनुक्रम को पूरा करें।

- 22, 26, 53, 69, 194, ?
(A) 230 (B) 260
(C) 250 (D) 245
- 69, 149, 189, 209, 219
(A) 224 (B) 225
(C) 219 (D) 229
- VWX, BCD, HIJ, ?
(A) NOQ (B) NOP
(C) MNO (D) OPQ
- From the given alternative, select the word which can not be formed using the letters of the given words.
निम्नलिखित विकल्पों में से, वह शब्द चुनिए जो दिए गए शब्दों के अक्षरों का प्रयोग करके नहीं बनाया जा सकता है।
RECIPROCATE
(A) RATE (B) CREAT
(C) PERIOD (D) PRIOR

KD
Campus
KD Campus Pvt. Ltd

2007, OUTRAM LINES, 1ST FLOOR, OPPOSITE MUKHERJEE NAGAR POLICE STATION, DELHI-110009

निर्देश (72 - 74) नीचे दिए गए दण्ड चित्र में एक बहुमंजिला पार्किंग में दिए गए किसी दिन में प्रातः 6 बजे से सायं 6 बजे तक (प्रत्येक घंटे के अंत में) खड़ी की गई गाड़ियों की संख्या को दर्शाया गया है।



72. What is the average number (approximately) of cars parked per hour from 6 am to 6 pm on the given day?
दिए गए किसी दिन में 6 पूर्वाह्न बजे से 6 अपराह्न बजे तक प्रत्येक घण्टे में खड़ी की गई गाड़ियों की औसत संख्या (लगभग)

क्या है?

- (A) 92 (B) 85
(C) 86 (D) 82

73. If the charges of parking are ₹50 per hour, then find the total income from 6 am to 6 pm on the given day?

यदि पार्किंग का शुल्क ₹50 प्रति घंटा है, तो दिए गए दिन में पूर्वाह्न 6 बजे से अपराह्न 6 बजे तक प्राप्त कुल राशि ज्ञात कीजिए?

- (A) ₹50050 (B) ₹55000
(C) ₹55050 (D) ₹55500

74. For how many hours the number of parked cars is less than the average on the given day?

कितने घण्टों के लिए पार्किंग में खड़ी की गई गाड़ियों की संख्या दिए गए दिन के औसत से कम है।

- (A) 8 (B) 9
(C) 5 (D) 7

75. At what time the percentage change in number of parked cars is the maximum?

किस समय पार्किंग में खड़ी की गई गाड़ियों की संख्या के प्रतिशत में सबसे अधिक परिवर्तन हुआ है

- (A) 9 am to 10 am/पूर्वाह्न 9 बजे से पूर्वाह्न 10 बजे तक
(B) 1 pm to 2 pm/अपराह्न 1 बजे से अपराह्न 2 बजे तक
(C) 8 am to 9 am/पूर्वाह्न 8 बजे से पूर्वाह्न 9 बजे तक
(D) 5 pm to 6 pm/अपराह्न 5 बजे से अपराह्न 6 बजे तक

KD Semantics

- Synonyms
- Antonyms
- Correct Spellings
- One Word Substitution
- Idioms & Phrases

Words Picked from Previous Year Papers
Great Collection for Superb Preparation

2700⁺
Chosen Words

70 Sets

By
Neetu Singh

KD Campus
KD Publication

Visit us: <http://www.kdpublication.com/> Follow: www.facebook.com/neetu202

Publication

KD Publication

FOR SURE-SHOT RESULT

TIER-I
SSC CGL-2016
42
TEST PAPERS OF
ENGLISH LANGUAGE

- Complete, authentic and descriptive solutions.
- Useful for all competitive exams.

By
Neetu Singh

Part - IV (English Language)

Direction(76-77): Rearrange the parts of the sentence in correct order.

76. This may be essential at
P. where the market fails to deliver
Q. swath of an economy
R. times, but there is a wide
(A) QRP (B) QPR
(C) PRQ (D) RQP
77. We must urgently
P. ethics that respects, and responds
Q. humanely to, the strangers in our cities
R. and consciously develop a new
(A) RQP (B) PQR
(C) RPQ (D) QRP

Direction(78-79): In the following question, some part of the sentence may have errors. Find out which part of the sentence has an error and select the appropriate option. If a sentence is free from error, select 'No Error'.

78. The substitution of cream(A)/ instead of milk in the recipe (B)/makes for a rich dessert.(C)/No error(D)
(A) A (B) B
(C) C (D) D
79. The prince and princess(A)/made their way(B)/through the cheering crowd.(C)/No error(D)
(A) A (B) B
(C) C (D) D

Direction(80-81): Improve the bracketed part of the sentence.

80. Usually the climate in the Northern parts of India is cooler (from) the Southern parts.
(A) as (B) to
(C) than (D) no improvement
81. As management we are accountable (to) the Board of Directors.
(A) towards (B) with
(C) against (D) no improvement

Direction: In the following question, a sentence has been given in Direct/Indirect speech. Out of the four alternatives suggested, select the one, which best express the same sentence in Indirect/Direct speech.

82. Kunal said, "Tanu is coming this week."
(A) Kunal says that Tanu was coming that week.
(B) Kunal says that Tanu was coming this week.
(C) Kunal said that Tanu was going to be come this week.
(D) Kunal said that Tanu was coming that week.

83. Select the word with the correct spelling.
(A) paterns (B) smudeging
(C) dissuade (D) fripery

Direction: In the following question, a sentence has been given in Active/Passive voice. Out of four alternatives suggested, select the one, which best expresses the same sentence in Passive/Active voice.

84. I took the grinder yesterday.
(A) The grinder was took by me yesterday.
(B) The grinder was took by me the day before.
(C) The grinder had been took by me the day before.
(D) The grinder was taken by me yesterday.

Direction(85-86): In the following question, sentence given with blank is to be filled in with an appropriate word. Select the correct alternative out of the four and indicate it by selecting the appropriate option.

85. Jasbir has the ___ of a movie star.
(A) jinx (B) charisma
(C) flash (D) mysticism
86. The enzyme was the ___ that triggered the chemical reaction.
(A) catalyst (B) support
(C) encouragement (D) incitation

Direction(87-88): Choose the correct meaning of the idiom/phrase: In the following question, out of the four alternatives, select the alternative which best expresses the meaning of the idiom/phrase.

87. to go the extra mile
(A) to get an unexpected bonus
(B) to make a special effort to achieve something
(C) to lose one's way and walk aimlessly
(D) a vehicle which is very fuel efficient
88. to go for broke
(A) to risk everything in an allout effort
(B) failure in relationship or partnership
(C) losing all money in an effort to revive a failing business
(D) to start again after failing in a business

Direction(89-90): In the following question, out of the four alternatives, select the alternative which is the best substitute of the phrase.

89. The action of repeating something aloud from memory.
(A) paraphrase (B) rendition
(C) erudition (D) recitation

KD
Campus
KD Campus Pvt. Ltd

2007, OUTRAM LINES, 1ST FLOOR, OPPOSITE MUKHERJEE NAGAR POLICE STATION, DELHI-110009

90. A political leader who seeks support by appealing to popular desires and prejudices rather than by using rational argument.
(A) rebel (B) radical
(C) demagogue (D) anarchistic
91. Select the synonym of bounder
(A) lout (B) mediocre
(C) done (D) decorous
92. Select the antonym of apocalypse
(A) catastrophe (B) miracle
(C) decimation (D) holocaust
93. Select the antonym of to actuate
(A) to retard (B) to spur
(C) to impel (D) to propel
94. Select the synonym of shimmering
(A) stolid (B) glinting
(C) daft (D) daffy
95. Select the word with the correct spelling.
(A) adendum (B) atlantise
(C) inovate (D) abseiled


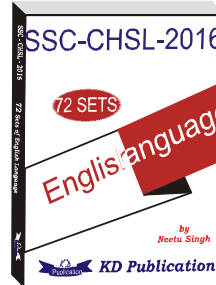


Direction (96-100): In the following passage, some of the words have been left out. Read the passage carefully and select the correct answer for the given blank out of the four alternatives.

.....(96).....the many existing cyber warfare scenarios, not excluding a coordinated cyber

attack that(97).... sabotage multiple infrastructure assets, erecting proper defences is(98)..... Anonymity and low cost have meant that(99)....small disaffected groups apart from hostile states and official agencies could(100).....to cyber techniques.

96.the many existing cyber warfare scenarios
(A) Give (B) Given
(C) Giving (D) To give
97. coordinated cyber attack thatsabotage multiple infrastructure assets
(A) would (B) should
(C) could (D) will
98. erecting proper defences is
(A) vital (B) vitality
(C) to vital (D) vitalness
99. Anonymity and low cost have meant that small disaffected groups
(A) too (B) not only
(C) even (D) both
100. hostile states and official agencies could to cyber techniques.
(A) camp (B) lodge
(C) park (D) resort

SSC (CHSL-2016) 72 Sets





KD Campus Pvt. Ltd

2007, OUTRAM LINES, 1ST FLOOR, OPPOSITE MUKHERJEE NAGAR POLICE STATION, DELHI-110009

Rough

KD Campus