

REASONING QUIZ**Q1 : Find the missing number?**

0	2	4
2	6	3
3	?	5
35	225	216

- (A) 0
 (B) 2
 (C) 1
 (D) 4

Q2 : find the missing number practice test

4	8	5
3	6	9
10	46	?

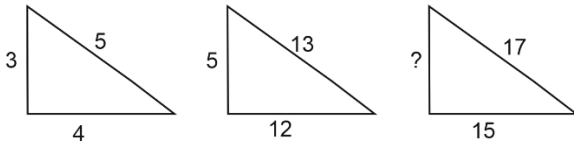
- (A) 43
 (B) 45
 (C) 47
 (D) 41

Q3 : In the following question, select the number which can be placed at the sign of question mark (?) from the given alternatives .

3	17	2	16	6	13
11	4	10	2	13	?

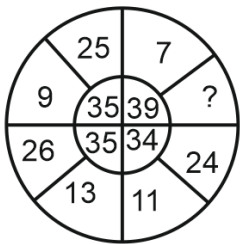
- (A) 1
 (B) 2
 (C) 3
 (D) 4

Q4 : In the following question find out the missing number?



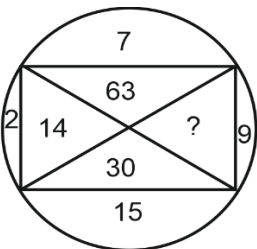
- (A) 2
- (B) 6
- (C) 8
- (D) 64

Q5 : In the following question find the missing number?



- (A) 28
- (B) 36
- (C) 81
- (D) 49

Q6 : In the following question find out the missing number?



- (A) 33
- (B) 145
- (C) 135
- (D) 18

Q7 : In the following questions select the number which can be placed at the sign of question mark (?) from the given alternatives.

1	7	6	56
1	4	8	45
2	3	6	?

- (A) 32
(B) 35
(C) 46
(D) 47

Q8 : Some equations are solved on the basis of certain system. Find the correct answer for the unsolved equation on that basis.

$$5 \times 4 \times 3 = 70,$$

$$6 \times 5 \times 4 = 140$$

$$7 \times 6 \times 5 = ?$$

- (A) 210
(B) 220
(C) 230
(D) 240

Q9 : In the following diagram find the number at the question mark.

AB	BC	CD
5	13	?

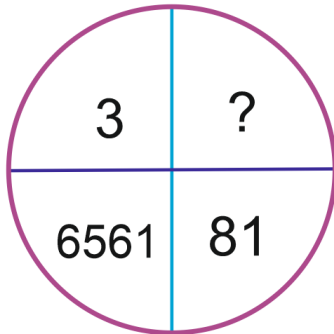
- (A) 18
(B) 20
(C) 25
(D) 35

Q10 : A series is given with one term missing. Select the correct alternative from the given ones that will complete the series.

I, L, O, R, ?

- (A) S
(B) T
(C) U

(D) V

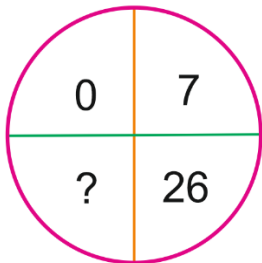
Direction(11 to 15): Find the missing number character in each of the following :**Q.11. Find the missing number**

(A) 9

(B) 18

(C) 24

(D) 27

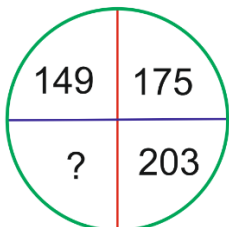
Q12. Find the missing number

(A) 45

(B) 50

(C) 60

(D) 63

Q13. Find the missing number

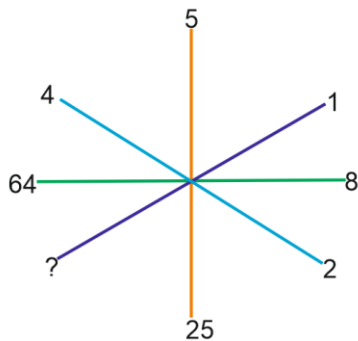
(A) 148

(B) 208

(C) 213

(D 233

Q14. Find the missing number



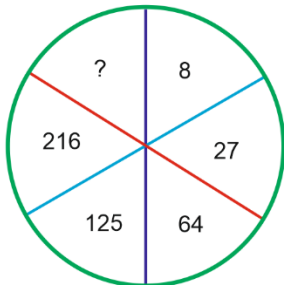
(A) 1

(B) 2

(C) 3

(D) 4

Q15. Find the missing number



(A) 4

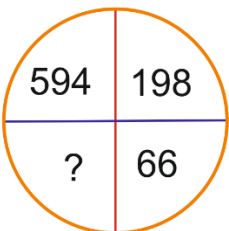
(B) 305

(C) 343

(D) 729

Direction(16 to 20): Find the missing number character in each of the following :

Q16. Find the missing number



(A) 11

(B) 12

(C) 22

(D 33)

Q17. Find the missing number

18	24	32
12	14	16
3	?	4
72	112	128

(A) 2

(B) 3

(C) 4

(D) 5

Q18. Find the missing number

1	2	3
4	5	6
7	8	9
27	38	?

(A) 49

(B) 50

(C) 51

(D) 52

Q19. Find the missing number

F	I	O
A	J	K
E	M	?

(A) P

(B) R

(C) S

(D) V

Q20. Find the missing number

3C	2B	4A
27A	?	64B
9C	4A	16B

- (A) 8C
- (B) 12B
- (C) 16C
- (D) 18C

ANSWER

- 1. C**
- 2. A**
- 3. A**
- 4. C**
- 5. A**
- 6. C**
- 7. D**
- 8. D**
- 9. C**
- 10. C**
- 11. A**
- 12. D**
- 13. D**
- 14. A**
- 15. C**

16. C

17. B

18. C

19. B

20. A