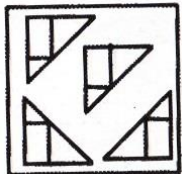


# REASONING QUIZ


## Figure Formation - Non Verbal Reasoning Questions

**Q(1to5) :** Direction: In each of the following questions, find out which of the answer figures can be formed from the pieces given in the problem figure.


**Question figure**



(A)




(B)




(C)




(D)




**Q2 : Question figure**




(A)




(B)



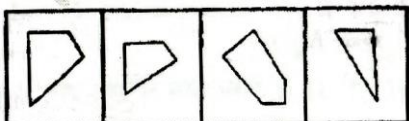
(C)




(D)




**Q3 : Question figure**




(A)




(B)



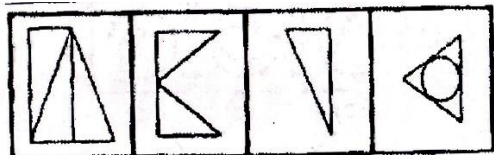
(C)



(D)




**Q4 : Question Figure**



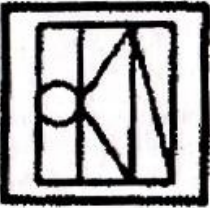
(A)



(B)



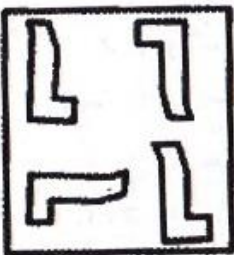
(C)



(D)




**Q5 : Question Figure**



(A)



(B)



(C)

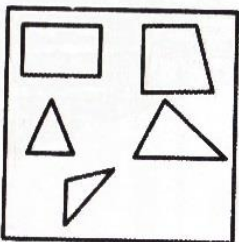


(D)



**Q(6to10) : Direction: In each of the following questions, find out which of the answer figures can be formed from the pieces given in the problem figure.**


**Question figure**



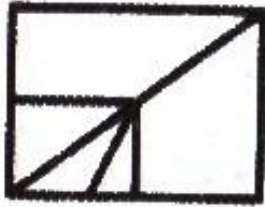
(A)



(B)



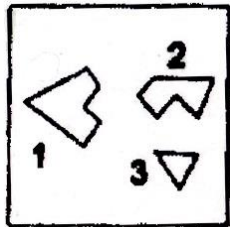
(C)



(D)



**Q7 : Question figure**




(A)




(B)



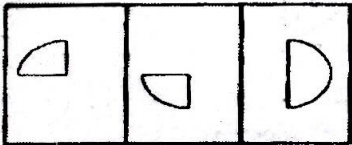
(C)



(D)




**Q8 : Question Figure**



(A)




(B)



(C)



(D)



**Q9 : Question Figure**




(A)



(B)



(C)




(D)






**Q10 : Question figure**




(A)




(B)



(C)

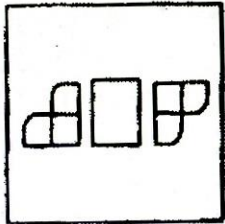


(D)




**Q(11to15) : Direction: In each of the following questions, find out which of the answer figures can be formed from the pieces given in the problem figure.**

**Question figure**




(A)




(B)



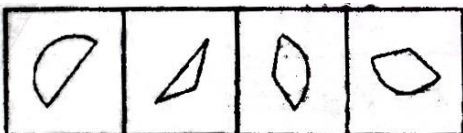
(C)




(D)



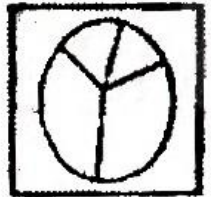
**Q12 : Question Figure**




(A)




(B)




(C)



(D)



**Q13 : Question Figure**



(A)



(B)



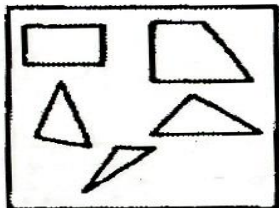
(C)




(D)



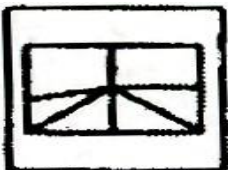
**Q14 : Question Figure**




(A)




(B)



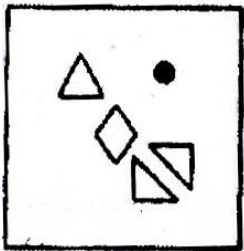
(C)



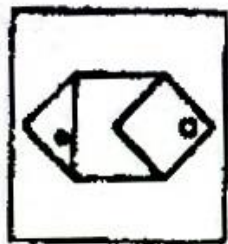
(D)



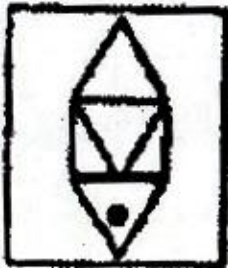
**Q15 : Question Figure**




(A)




(B)



(C)




(D)




**Q(16to20) : Direction: In each of the following questions, find out which of the answer figures can be formed from the pieces given in the problem figure.**

**Question Figure**




(A)



(B)




(C)



(D)




**Q17 : Question Figure**




(A)



(B)



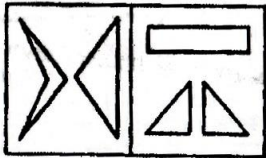
(C)




(D)




**Q18 : Question figure**




(A)



(B)




(C)

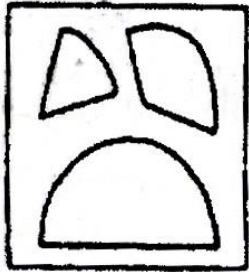


(D)






**Q19 : Question Figure**




(A)



(B)



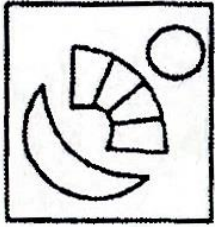
(C)



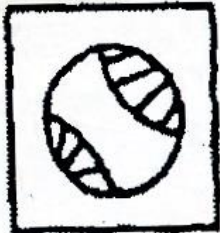
(D)



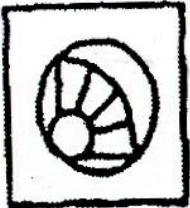
**Q20 : Question Figure**



(A)




(B)



(C)



(D)



**ANSWERS**

**1.D**

**2.D**

**3.A**

**4.A**

**5.A**

**6.A**

**7.D**

**8.C**

**9.D**

**10.C**

**11.A**

**12.A**

**13.A**

**14.A**

**15.C**

**16.C**

**17.D**

**18.B**

**19.A**

**20.B**