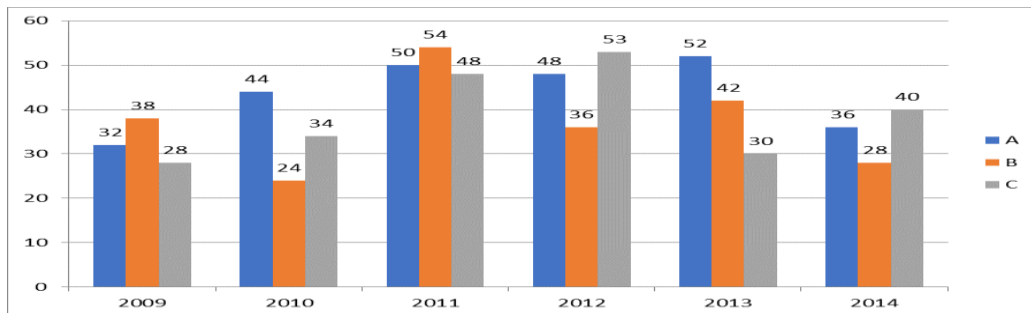


APTITUDE QUIZ

1 – 5) Study the following information carefully and answer the questions given below.

A silver coins produced by three different companies-A,B and C. The production of silver coins over a period of six years has been expressed in the bar graph provided below.

Production of silver coins in lakhs.



Q.1) In which year, the average output of the 3 companies together (for that year) is the fourth highest in terms of production?

- a) 2009
- b) 2010
- c) 2012
- d) 2013
- e) 2014

Q.2) Sum of production of silver coins by company A and production of silver coins by company B in the given period is approximately what percentage of total production of silver coins by all the three companies in 2009 and 2012 together? (Approximately)

- a) 208%
- b) 219%
- c) 209%
- d) 206%
- e) None of these

Q.3) The average production of silver coins by company B in 2009, 2010 and 2011 is what percentage the average production of silver coins by company C in 2012, 2013 and 2014?

- a) 95.43%
- b) 94.32%
- c) 84.52%
- d) 82.02%
- e) None of these

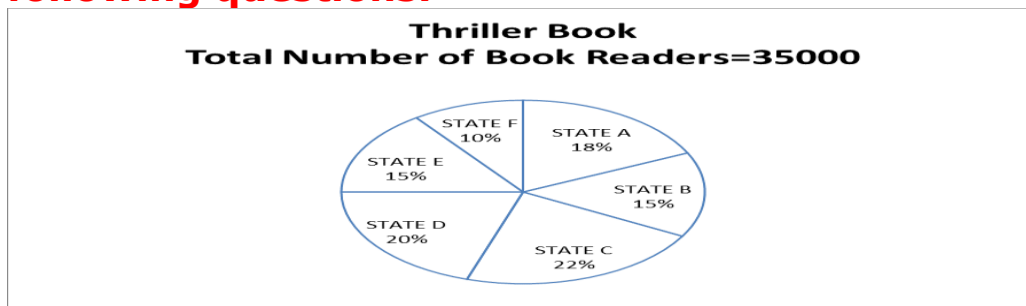
Q.4) what is the difference (in lakhs) between the total silver coins produced by company A in all the years together and total silver coins produced by company C in all the years together.

- a) 35
- b) 32
- c) 30
- d) 38
- e) 29

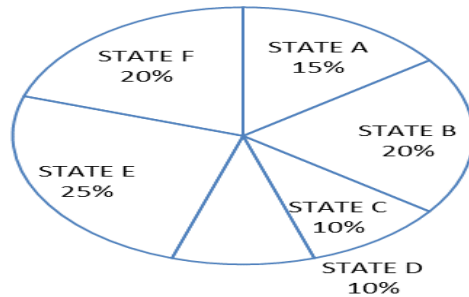
Q.5) silver coins produced by company B in 2013 is what percentage more than the silver coins produced by company B in previous year?

- a) 17.9%
- b) 12.45%
- c) 19.8%
- d) 16.67%
- e) 15.23%

Q. 6 – 10) Study the following information carefully and answer the following questions.



Novel Book
Total Number of Book Readers=25000



Q.6) What is the total number of Novel book readers in state B,E and F together?

- a) 12500
- b) 16250
- c) 13550
- d) 15500
- e) None of these

Q.7) What is the difference between number of thriller book readers in state B,C and F and the number of Novel book readers in state A,C and D?

- a) 7500
- b) 8900
- c) 7700
- d) 6800
- e) None of these

Q.8) Thriller book readers in state C is what percent of the Novel book readers in state B and D together?

- a) 102.67%
- b) 125%
- c) 104.9%
- d) 109.7%
- e) None of these

Q.9) What is the ratio of the average of thriller book reader in state D and E together and average of Novel book reader in all the state together(excluding D)?

- a) 39 : 43
- b) 45 : 43
- c) 43 : 45
- d) 49 : 36
- e) None of these

Q.10) If male to female ratio of Thriller book readers is 3:2 in state C, then how many female readers in state C?

- a) 3565
- b) 3080
- c) 2456
- d) 3803
- e) None of these

ANSWER

1.e

2.d

3.b

4.e

5.d

6.b

7.c

8.a

9.d

10.b